

Name: \_\_\_\_\_

## Diveodile's Telling Time Quest

Help Diveodile find which clock shows the correct time!

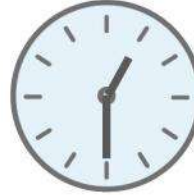
Circle the clock that shows the correct answer!

1. Which clock shows **two o'clock**?

3:00

2:00

2. Which clock shows **one-thirty**?



3. Which clock shows **eleven o'clock**?



4. Which clock shows **seven o'clock**?

7:00

7:30

5. Which clock shows **twelve-thirty**?



6. Which clock shows **four-thirty**?

8:30

4:30

7. Which clock shows **six-thirty**?

6:00

6:30

8. Which clock shows **nine o'clock**?



9. Which clock shows **eight o'clock**?



9:00

10. Which clock shows **ten-thirty**?



10:30

11. Which clock shows **three-thirty**?



# Diveodile's Telling Time Quest:

## Hour and Half Hour

### Answer Key

1. Which clock shows **two o'clock**?

3:00




2. Which clock shows **one-thirty**?



3. Which clock shows **eleven o'clock**?

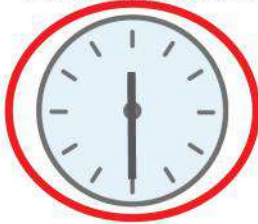


4. Which clock shows **seven o'clock**?




7:30

5. Which clock shows **twelve-thirty**?



6. Which clock shows **four-thirty**?

8:30



7. Which clock shows **six-thirty**?


6:00



8. Which clock shows **nine o'clock**?



9. Which clock shows **eight o'clock**?



9:00

10. Which clock shows **ten-thirty**?



11. Which clock shows **three-thirty**?

