

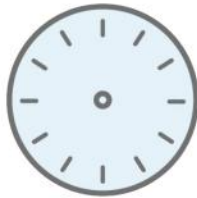
Name: \_\_\_\_\_

## Florafox's Telling Time Quest

Help Florafox draw hands on the analog clocks to match the time on the digital clocks!


1.

7:15



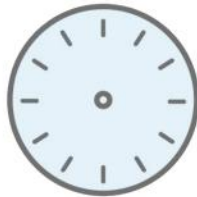
2.

2:40



3.

4:25



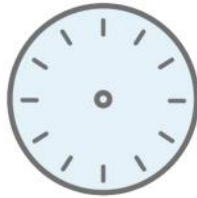
4.

11:05




5.

9:40




6.

12:45



7.

1:55



8.

6:00




9.

7:20



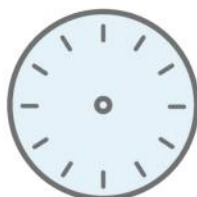
10.

5:35



11.

3:10



# Florafox's Telling Time Quest:

## Reading Clocks and Writing Time

### Answer Key

1.

7:15



2.

2:40



3.

4:25



4.

11:05



5.

9:40



6.

12:45



7.

1:55



8.

6:00



9.

7:20



10.

5:35



11.

3:10

